

Number 7 Washing Line Number Bonds


I need help with my washing! Help me work out the different ways I have made 7 on my washing lines.



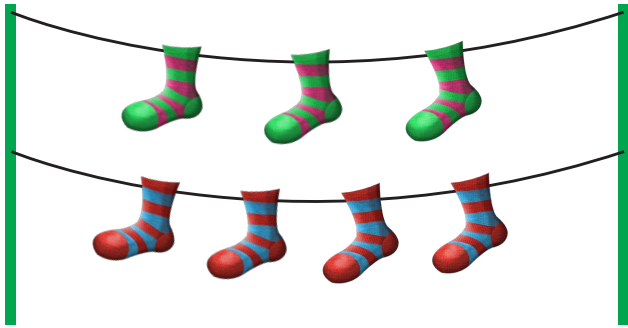
$$4 + \square = 7$$



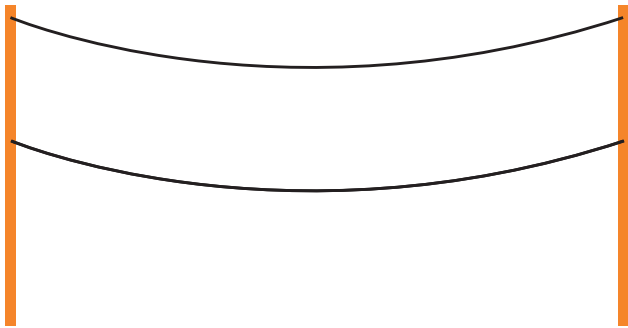
$$\square + 2 = 7$$



$$\square + \square = 7$$



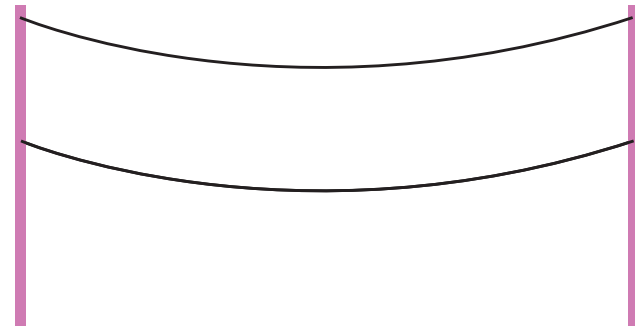
$$\square + \square = \square$$



$$\square + \square = \square$$



$$\square + \square = \square$$



$$\square + \square = \square$$