


Addition with a pirate

Use the pictures to help you. Count both groups to find the answer

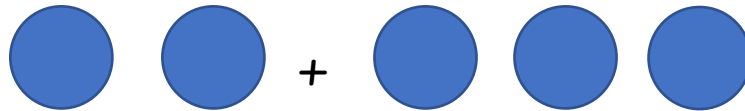
$4 + 2 = \square$




$3 + 1 = \square$



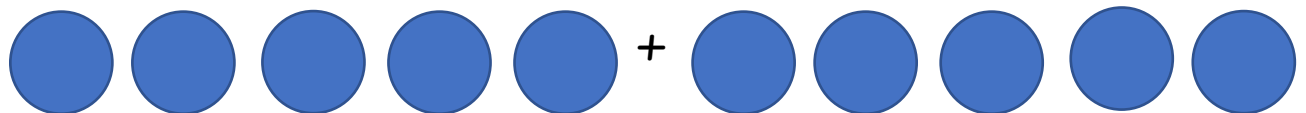
$2 + 3 = \square$



$0 + 7 = \square$



$5 + 5 = \square$



$8 + 1 = \square$

